



3 Times Table Activities

Count in 3s and colour in the grid:

1	2	3	4	5	6
7	8	9	10	11	12
13	14	15	16	17	18
19	20	21	22	23	24
25	26	27	28	29	30
31	32	33	34	35	36

Work out these answers:

a) $3 \times 4 =$ _____ f) $3 \times 6 =$ _____


b) $3 \times 3 =$ _____ g) $3 \times 7 =$ _____


c) $3 \times 5 =$ _____ h) $3 \times 1 =$ _____


d) $3 \times 2 =$ _____ i) $3 \times 11 =$ _____

e) $3 \times 9 =$ _____ j) $3 \times 8 =$ _____

How many pieces of fruit are there?

a)  _____ \times _____ = _____

b)  _____ \times _____ = _____

c)  _____ \times _____ = _____

d)  _____ \times _____ = _____